


Name: _____

Date: _____

MATHS -Summer Holidays Revision Pack

Year 10-Diagnostic



Teacher's Assessment

Red	Amber	Green

Self-Assessment



My Parent/Carer Comment::

My Teacher Comment:

1. Sam is adding up the number of comics he bought each day. What is the missing number?

Check
your
answers!!!



Sunday	3
Monday	1
Tuesday	<input type="text"/>
Wednesday	3
Thursday	2
Friday	2
Saturday	2
TOTAL	16

2. Write the missing numbers in the boxes in each calculation.

a)

$$\begin{array}{r}
 2 \quad 3 \quad \square \\
 + \quad 4 \quad \square \quad 8 \\
 \hline
 6 \quad 5 \quad 5
 \end{array}$$

b)

$$\begin{array}{r}
 2 \quad \square \quad 6 \\
 + \quad \square \quad 1 \quad 9 \\
 \hline
 8 \quad 0 \quad 5
 \end{array}$$

c)

$$\begin{array}{r}
 4 \quad 7 \quad 3 \\
 + \quad \square \quad 1 \quad 9 \\
 \hline
 9 \quad \square \quad 2
 \end{array}$$

d)

$$\begin{array}{r}
 \square \quad 7 \quad 7 \\
 + \quad 2 \quad 8 \quad \square \\
 \hline
 9 \quad \square \quad 2
 \end{array}$$

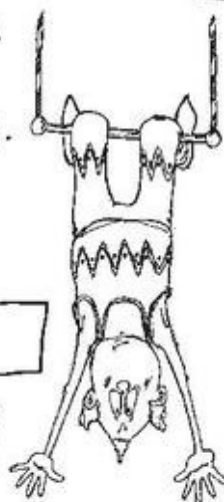
2 Ordering Numbers



Which number would you like to order?

Name _____

All that you have to do on this worksheet is to put numbers into empty boxes to create an order. In other words, put the numbers in order. That's all there is to it. It's as easy as hanging upside-down.





1. 197 198 202 203
2. 576 575 573 571
3. 40 50 90
4. 19 21 25 33
5. 302 304 306 308
6. 951 961 971 1021
7. 1400 1300 1200
8. 100, 200, 400, 800, ,

Write these numbers in words (the first one is done for you)

9. 37 = Thirty seven
10. 800 =
11. 1001 =
12. 519 =

WHIZZKIDS ONLY: Write these numbers in figures (eg: forty-one = 41)

- a, Six hundred and seventy six =
- b, One thousand eight hundred and sixteen =

1)	$142 - 10$	
2)	Half of 32	
3)	Multiply 7 by 3	
4)	Round 126 to the nearest 10	
5)	Double £1.24	
6)	<p>How much money?</p> 	
7)	$300 + \underline{\quad} = 391$	
8)	<p>How many lines of symmetry?</p> 	
9)	$12 - 6 + 8$	
10)	How much less than 2 metres is 180cm?	
11)	85 minutes = 1 hour _____ minutes	
12)	How many months in 3 years?	
13)	On a fishing trip, Flame caught 22 fish. Captain caught 27. How many more fish did Captain catch?	
14)	Tyger gets 7 out of 10 in a times tables test. What fraction is this?	
15)	Frazer gets paid 50p a day. How much does he get in a week?	
16)	Sally buys 3 pens for £12. How much did 1 pen cost?	